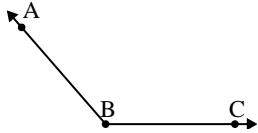




Solve each problem.

Answers


1)



Which choice best represents $\angle ABC$?

- A. 107°
- B. 131°
- C. 26°
- D. 57°

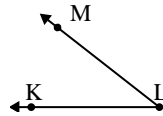
2)



Which choice best represents $\angle ABC$?

- A. 154°
- B. 15°
- C. 49°
- D. 76°

3)



Which choice best represents $\angle KLM$?

- A. 38°
- B. 81°
- C. 175°
- D. 107°

1. _____

2. _____

3. _____

4. _____

5. _____

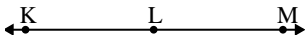
6. _____

7. _____

8. _____

9. _____

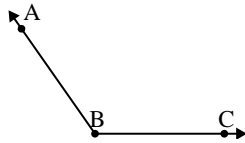
4)



Which choice best represents $\angle KLM$?

- A. 156°
- B. 71°
- C. 180°
- D. 25°

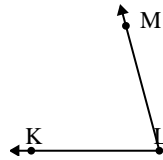
5)



Which choice best represents $\angle ABC$?

- A. 58°
- B. 33°
- C. 4°
- D. 125°

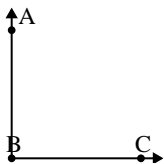
6)



Which choice best represents $\angle KLM$?

- A. 29°
- B. 172°
- C. 7°
- D. 75°

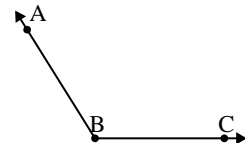
7)



Which choice best represents $\angle ABC$?

- A. 69°
- B. 127°
- C. 3°
- D. 90°

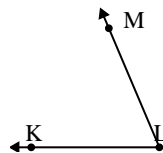
8)



Which choice best represents $\angle ABC$?

- A. 122°
- B. 84°
- C. 37°
- D. 158°

9)

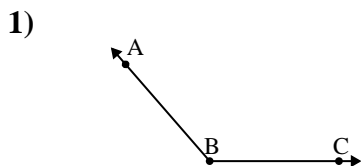


Which choice best represents $\angle KLM$?

- A. 122°
- B. 165°
- C. 67°
- D. 143°

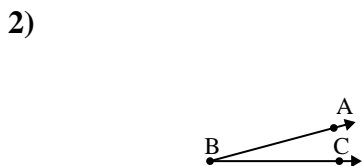


Solve each problem.



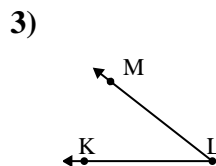
Which choice best represents $\angle ABC$?

- A. 107°
- B. 131°
- C. 26°
- D. 57°



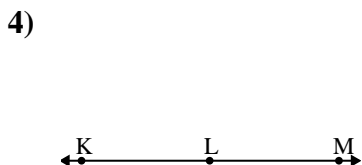
Which choice best represents $\angle ABC$?

- A. 154°
- B. 15°
- C. 49°
- D. 76°



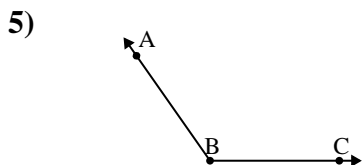
Which choice best represents $\angle KLM$?

- A. 38°
- B. 81°
- C. 175°
- D. 107°



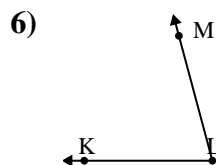
Which choice best represents $\angle KLM$?

- A. 156°
- B. 71°
- C. 180°
- D. 25°



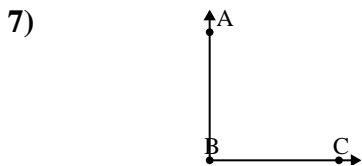
Which choice best represents $\angle ABC$?

- A. 58°
- B. 33°
- C. 4°
- D. 125°



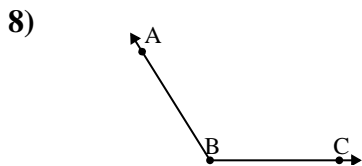
Which choice best represents $\angle KLM$?

- A. 29°
- B. 172°
- C. 7°
- D. 75°



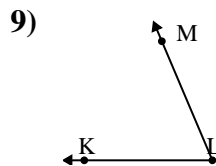
Which choice best represents $\angle ABC$?

- A. 69°
- B. 127°
- C. 3°
- D. 90°



Which choice best represents $\angle ABC$?

- A. 122°
- B. 84°
- C. 37°
- D. 158°



Which choice best represents $\angle KLM$?

- A. 122°
- B. 165°
- C. 67°
- D. 143°

Answers

1. **B**

2. **B**

3. **A**

4. **C**

5. **D**

6. **D**

7. **D**

8. **A**

9. **C**